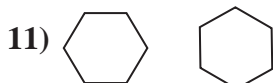
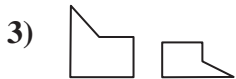
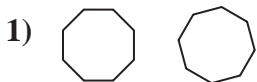




Determine if the shapes shown are congruent (yes) or not (no).

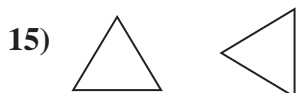
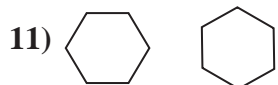
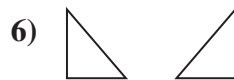
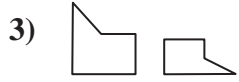
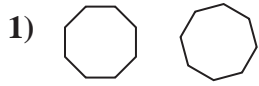
Answers



- 1. _____
- 2. _____
- 3. _____
- 4. _____
- 5. _____
- 6. _____
- 7. _____
- 8. _____
- 9. _____
- 10. _____
- 11. _____
- 12. _____
- 13. _____
- 14. _____
- 15. _____
- 16. _____



Determine if the shapes shown are congruent (yes) or not (no).



Answers

1. **Yes**

2. **Yes**

3. **No**

4. **No**

5. **Yes**

6. **Yes**

7. **No**

8. **No**

9. **Yes**

10. **Yes**

11. **Yes**

12. **No**

13. **No**

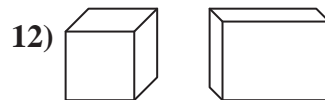
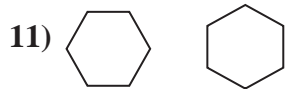
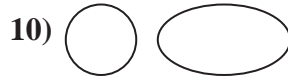
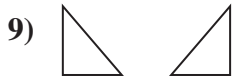
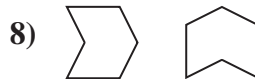
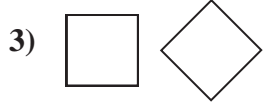
14. **No**

15. **Yes**

16. **No**



Determine if the shapes shown are congruent (yes) or not (no).



Answers

1. _____

2. _____

3. _____

4. _____

5. _____

6. _____

7. _____

8. _____

9. _____

10. _____

11. _____

12. _____

13. _____

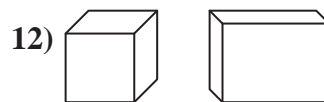
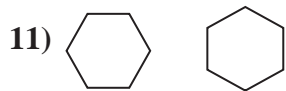
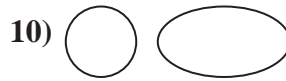
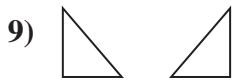
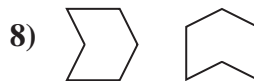
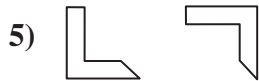
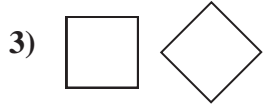
14. _____

15. _____

16. _____



Determine if the shapes shown are congruent (yes) or not (no).



Answers

1. No

2. Yes

3. Yes

4. No

5. Yes

6. No

7. Yes

8. Yes

9. Yes

10. No

11. Yes

12. No

13. No

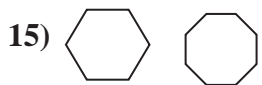
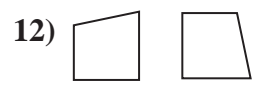
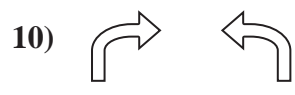
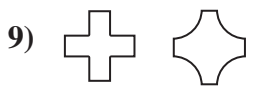
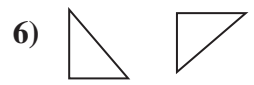
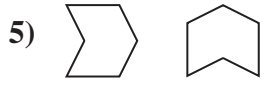
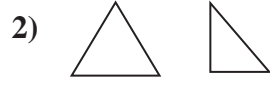
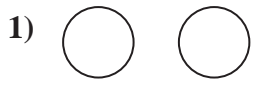
14. No

15. Yes

16. No



Determine if the shapes shown are congruent (yes) or not (no).

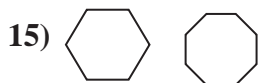
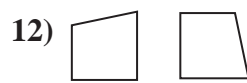
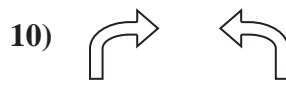

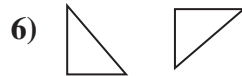
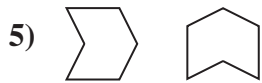



Answers

1. _____
2. _____
3. _____
4. _____
5. _____
6. _____
7. _____
8. _____
9. _____
10. _____
11. _____
12. _____
13. _____
14. _____
15. _____
16. _____



Determine if the shapes shown are congruent (yes) or not (no).



Answers

1. Yes

2. No

3. No

4. No

5. Yes

6. Yes

7. No

8. No

9. No

10. Yes

11. No

12. Yes

13. Yes

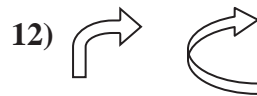
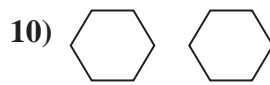
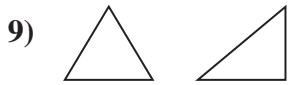
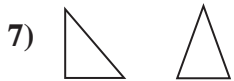
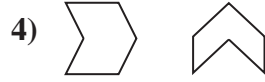
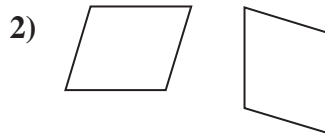
14. Yes

15. No

16. Yes



Determine if the shapes shown are congruent (yes) or not (no).

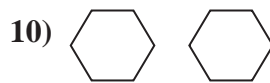
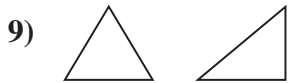
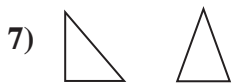
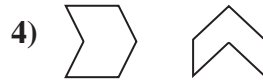


Answers

1. _____
2. _____
3. _____
4. _____
5. _____
6. _____
7. _____
8. _____
9. _____
10. _____
11. _____
12. _____
13. _____
14. _____
15. _____
16. _____



Determine if the shapes shown are congruent (yes) or not (no).



Answers

1. Yes

2. Yes

3. No

4. No

5. No

6. No

7. No

8. Yes

9. No

10. Yes

11. Yes

12. No

13. Yes

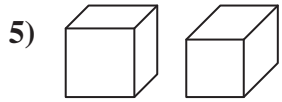
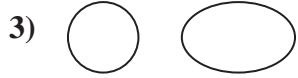
14. Yes

15. Yes

16. No



Determine if the shapes shown are congruent (yes) or not (no).



Answers

1. _____

2. _____

3. _____

4. _____

5. _____

6. _____

7. _____

8. _____

9. _____

10. _____

11. _____

12. _____

13. _____

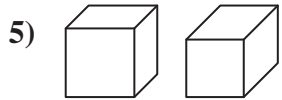
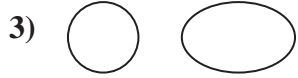
14. _____

15. _____

16. _____



Determine if the shapes shown are congruent (yes) or not (no).



Answers

1. No

2. No

3. No

4. Yes

5. No

6. Yes

7. No

8. Yes

9. No

10. Yes

11. No

12. Yes

13. Yes

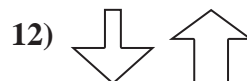
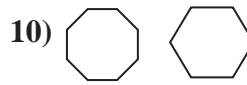
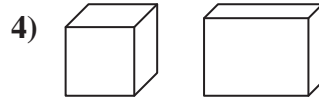
14. No

15. Yes

16. Yes



Determine if the shapes shown are congruent (yes) or not (no).

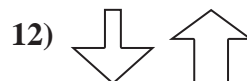
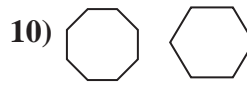
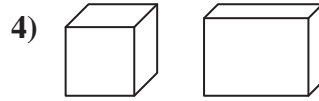


Answers

1. _____
2. _____
3. _____
4. _____
5. _____
6. _____
7. _____
8. _____
9. _____
10. _____
11. _____
12. _____
13. _____
14. _____
15. _____
16. _____



Determine if the shapes shown are congruent (yes) or not (no).



Answers

1. **No**

2. **Yes**

3. **No**

4. **Yes**

5. **Yes**

6. **Yes**

7. **No**

8. **Yes**

9. **Yes**

10. **No**

11. **No**

12. **No**

13. **Yes**

14. **Yes**

15. **No**

16. **No**



Determine if the shapes shown are congruent (yes) or not (no).

Answers



1. _____



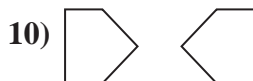
2. _____



3. _____



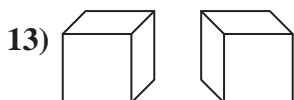
4. _____



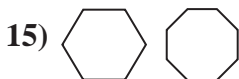
5. _____



6. _____



7. _____



8. _____

9. _____

10. _____

11. _____

12. _____

13. _____

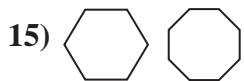
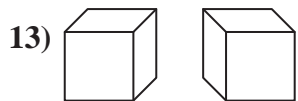
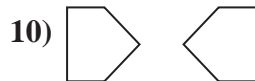
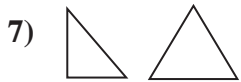

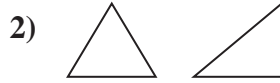
14. _____

15. _____

16. _____



Determine if the shapes shown are congruent (yes) or not (no).



Answers

1. **No**

2. **No**

3. **Yes**

4. **Yes**

5. **Yes**

6. **Yes**

7. **No**

8. **No**

9. **No**

10. **Yes**

11. **Yes**

12. **No**

13. **Yes**

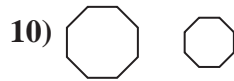
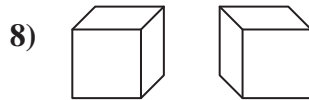
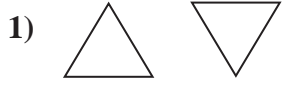
14. **Yes**

15. **No**

16. **No**



Determine if the shapes shown are congruent (yes) or not (no).

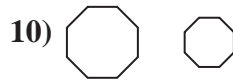
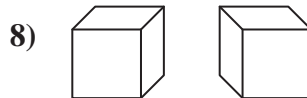


Answers

1. _____
2. _____
3. _____
4. _____
5. _____
6. _____
7. _____
8. _____
9. _____
10. _____
11. _____
12. _____
13. _____
14. _____
15. _____
16. _____



Determine if the shapes shown are congruent (yes) or not (no).



Answers

1. Yes

2. No

3. Yes

4. No

5. No

6. Yes

7. No

8. Yes

9. Yes

10. No

11. Yes

12. No

13. No

14. Yes

15. Yes

16. No

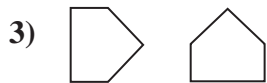


Determine if the shapes shown are congruent (yes) or not (no).

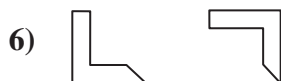
Answers



1. _____



2. _____



3. _____

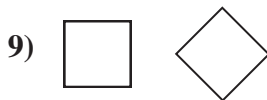
4. _____

5. _____



6. _____

7. _____



8. _____

9. _____

10. _____



11. _____

12. _____

13. _____

14. _____

15. _____


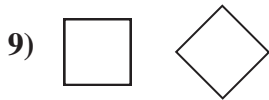
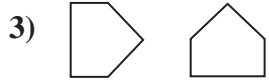


16. _____





Determine if the shapes shown are congruent (yes) or not (no).



Answers

1. **No**

2. **No**

3. **Yes**

4. **Yes**

5. **No**

6. **Yes**

7. **No**

8. **No**

9. **Yes**

10. **Yes**

11. **No**

12. **Yes**

13. **No**

14. **No**

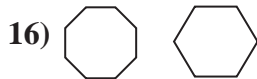
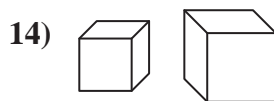
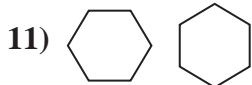
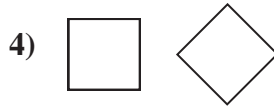
15. **Yes**

16. **Yes**



Determine if the shapes shown are congruent (yes) or not (no).

Answers



1. _____

2. _____

3. _____

4. _____

5. _____

6. _____

7. _____

8. _____

9. _____

10. _____

11. _____

12. _____

13. _____

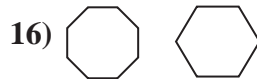
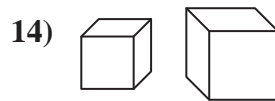
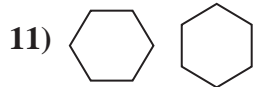
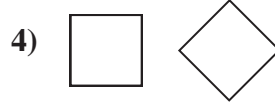
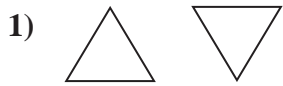
14. _____

15. _____

16. _____



Determine if the shapes shown are congruent (yes) or not (no).



Answers

1. **Yes**

2. **Yes**

3. **No**

4. **Yes**

5. **Yes**

6. **No**

7. **Yes**

8. **No**

9. **No**

10. **No**

11. **Yes**

12. **No**

13. **Yes**

14. **No**

15. **Yes**

16. **No**