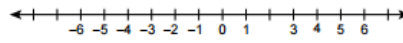
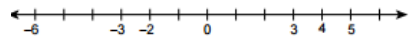
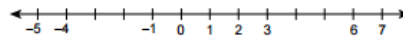
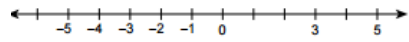
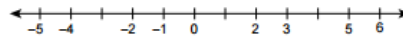
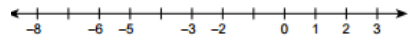
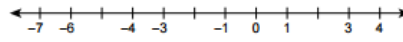
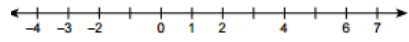
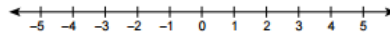


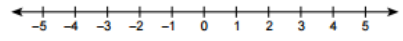
Write in the missing integers of the number line.



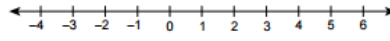
Graph the integers.



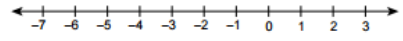
Graph -1 and 3.



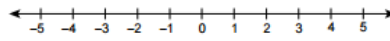
Graph 1 and 4.



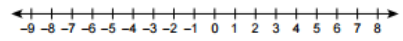
Graph -3 and 5.



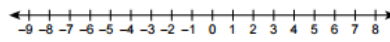
Graph -6 and -2.



Graph -2 and 2.



Graph -7 and 6.

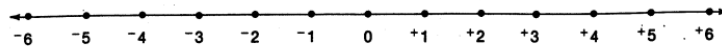



Graph -8 and 7.

PROBLEM SOLVING

Graph each described integer on the number line. What word is spelled?

- E: 20 feet above sea level
- T: A profit of 8 dollars
- L: Deposit 15 dollars
- S: 14 feet below sea level
- A: A loss of 2 dollars
- T: Grew 4 inches
- E: 8° below zero



< or > ? or =

- 1. +1  > 0
- 2. -1  < 0
- 3. -1  < +1
- 4. +5  < +4
- 5. +5  < -4
- 6. -5  < +4
- 7. -5  < -4
- 8. +5  < -5
- 9. +2  < |-2|
- 10. -7  < -1
- 11. -2  < -10
- 12. -10  < +9